
























## Time Knowledge

 time	 analogue clock	 digital clock	 hour hand	 minute hand
 hours	 minutes	 seconds	 o'clock	
 half past	 quarter past	 quarter to	 12-hour time	 24-hour time
 a.m.	 p.m.	 morning	 afternoon/evening	
 midday/noon	 midnight	 week	 month	 year

### Duration of Time



There are **24 hours** in a day

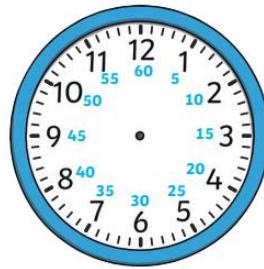


There are **7 days** in a week.



There are **12 months** in a year.

There are **60 seconds** in a minute.



There are **60 minutes** in an hour.

### Analogue and Digital Clocks

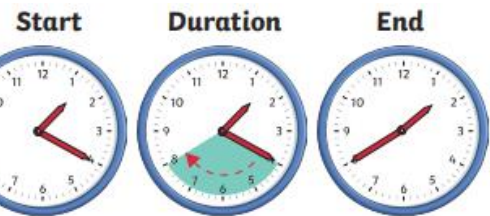


#### Minute Hand

The long hand points to the minutes past or the minutes to the hour.
























#### Hour Hand

The short hand points to the hour. If this hand is pointing between hours, it is either past the earlier hour or to the later hour.



20 minutes has passed.

## Time Knowledge

 time	 analogue clock	 digital clock	 hour hand	 minute hand
 hours	 minutes	 seconds	 o'clock	
 half past	 quarter past	 quarter to	 12-hour time	 24-hour time
 a.m.	 p.m.	 morning	 afternoon/evening	
 midday/noon	 midnight	 week	 month	 year

### Duration of Time



There are **24 hours** in a day

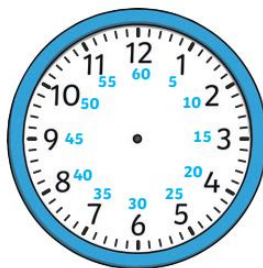


There are **7 days** in a week.



There are **12 months** in a year.

There are **60 seconds** in a minute.



There are **60 minutes** in an hour.

### Analogue and Digital Clocks

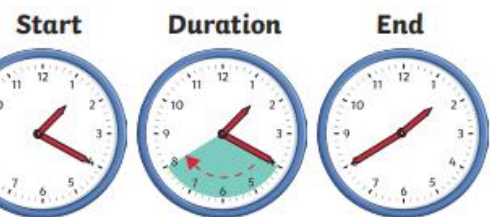


#### Minute Hand

The long hand points to the minutes past or the minutes to the hour.

#### Hour Hand

The short hand points to the hour. If this hand is pointing between hours, it is either past the earlier hour or to the later hour.



20 minutes has passed.